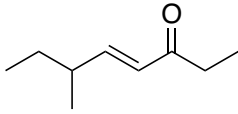


有機化学 III・宿題演習-1 (6/6, 2022)

問1 次の化合物の名称あるいは構造を示せ.

I)

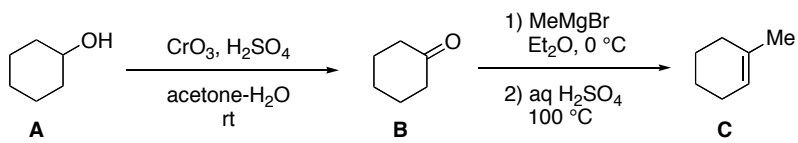


II)

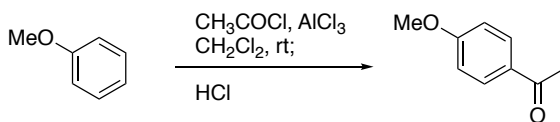
4-chloro-7-isopropyl-2-methylcyclooctanone

問2 以下の反応の反応機構を示せ.

I)



II)



III)

